

Donderdag, 7 Mei 2020

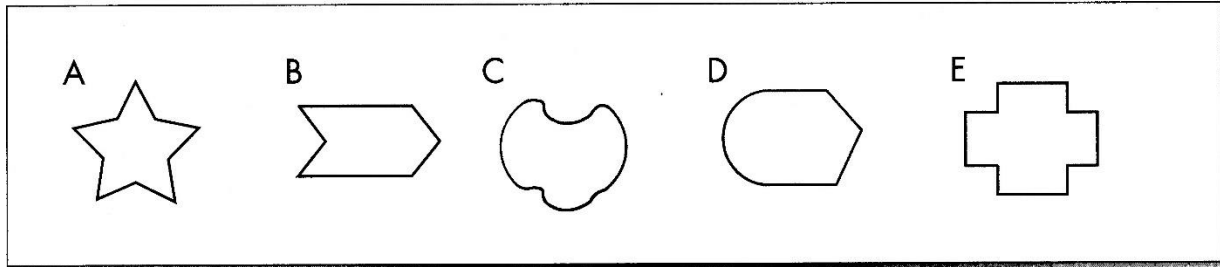
Graad 5



Doelwit: Identifiseer en benoem 2D-vorms
Verskille en eienskappe van 2D vorms en vierhoeke

Hulpbronne: DBE werkboek/Handboek(Almal verstaan)
Aktiwiteit kan op werkkaart voltooi word of lyntjiespapier.

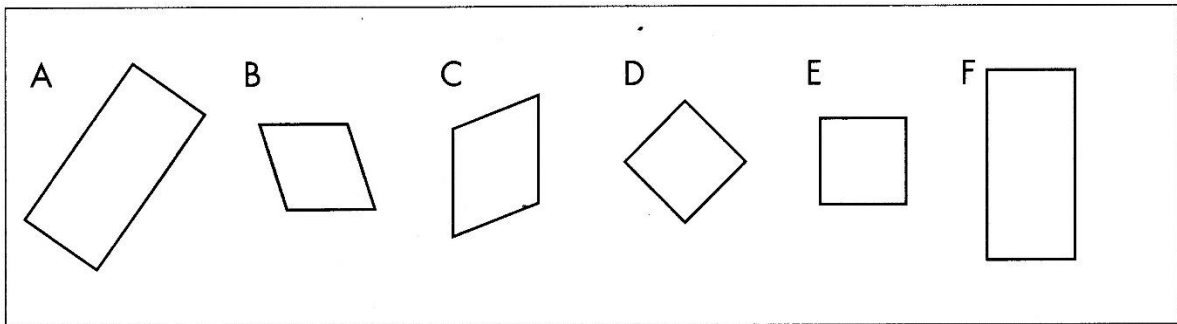
2D-vorms



1 Bestudeer die 2D-vorms en skryf die letter van elk onder die korrekte opskrif.

Vorms met slegs reguit sye	Vorms met geboë en reguit sye	Vorms met slegs geboë sye

2 Al die onderstaande vorms is vierhoeke.

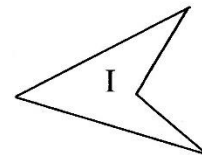
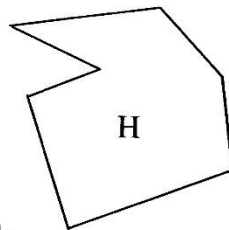
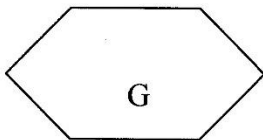
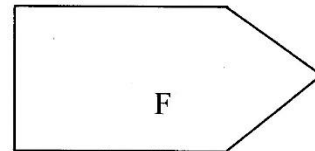
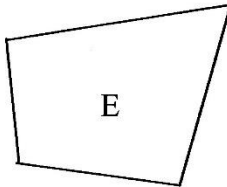
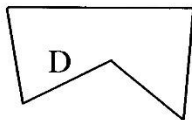
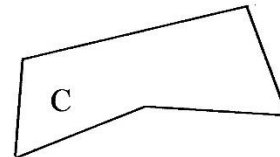
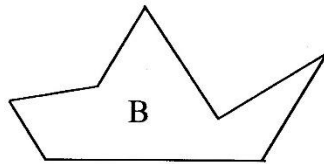
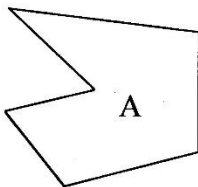
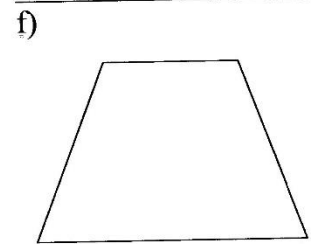
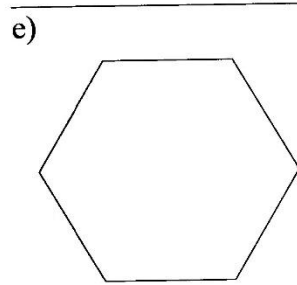
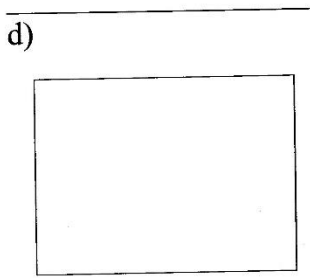
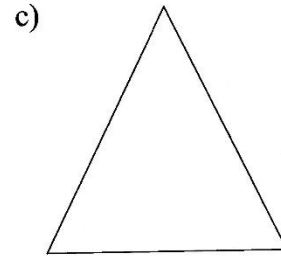
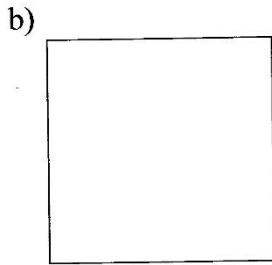
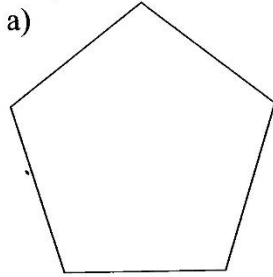


- Watter eienskap het hierdie vorms in gemeen?

- Kleur al die vorms wat soos vierkante lyk blou in en al die vorms wat soos reghoeke lyk groen.
- Gee 'n rede waarom sommige van die vorms nie reghoeke of vierkante is nie. _____
- Merk al die regte hoeke in rooi.
- Hoekom is 'n reghoek nie 'n vierkant nie? _____


2D vorms

Skryf die naam van elk van die 2-D vorm onder die vorm neer.

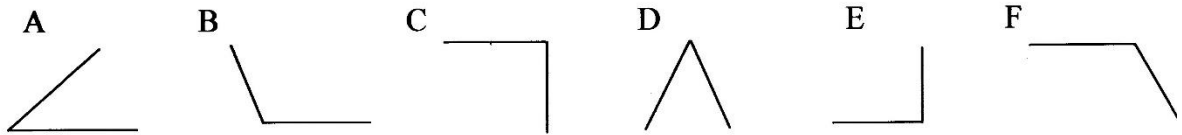


Die bostaande vorms gemerk

- a) _____ is vierhoeke.
b) _____ is pentagone.
c) _____ is heksagone.
d) _____ is heptagone.



2D vorms



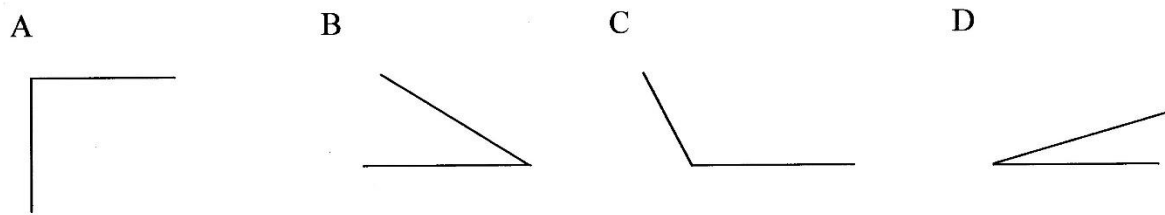
Die bostaande hoeke gemerk

- _____ is regte hoeke.
- _____ is elk kleiner as 'n regte hoek.
- _____ is elk groter as 'n regte hoek.

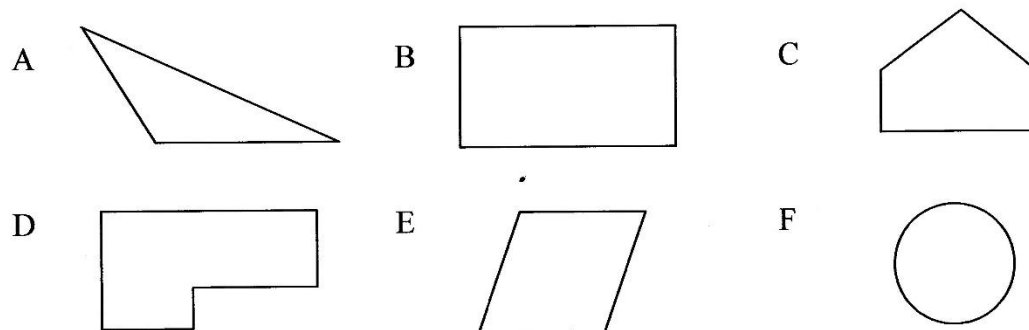
Ek weet jy kan!!



Rangskik die volgende hoeke vanaf die kleinste na die grootste.



Hoek _____ < _____ < _____



Kyk na die vorms hierbo en voltooi.

- Vorm(s) _____ het geen regte hoeke nie.
- Vorm (s) _____ het 2 regte hoeke.
- Vorm (s) _____ het ten minste 4 regte hoeke.

Memo

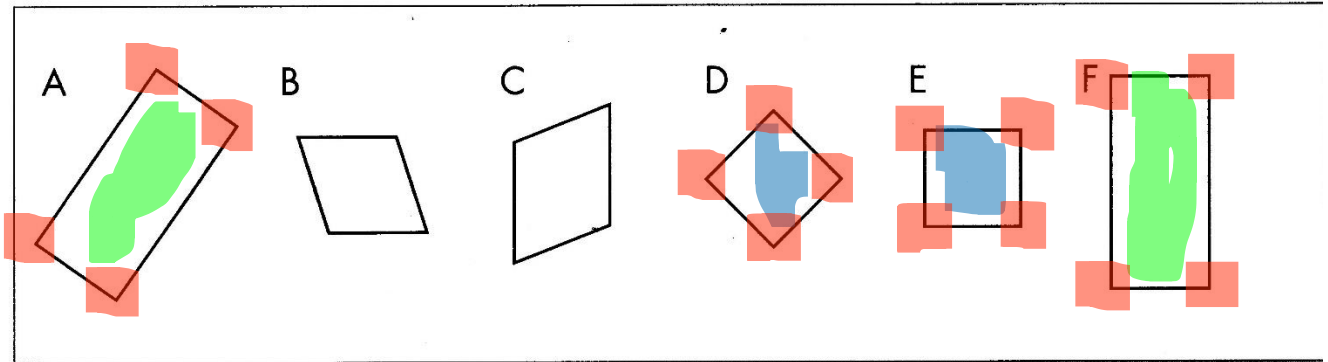
Donderdag, 7 Mei 2020

Werkkaart

A	D	C
B		
E		

1a) Vier hoeke en vier sye

b/d)



c) Geen regte hoeke nie.

e) Al 4 sy sye is nie ewe lank nie.

a) vyfhoek/pentagon

b) vierkant

c) driehoek/gelyksydige driehoek

d) reghoek

e) seshoek/heksagoon

f) vierhoek

a) Vierhoeke E, I

b) Pentagoon C, D, F,

c) Heksagoon A, G,

d) Heptagoon B, H

Hoeke

a) C, E

b) A, D

c) B, F

Klein tot groot

Hoek - D, B, A, C

Kyk na die vorms hierbo en voltooi

a) A, E, F

b) C

c) B, D

